

NCO CLASS 1

Total Questions: 35

Time: 1 hr.

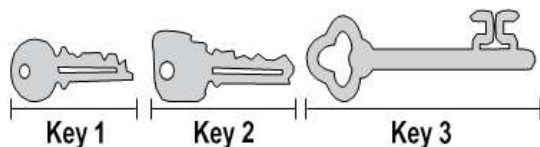
Section – 1 : Patterns, Odd One Out, Measuring Units, Geometrical Shapes, Spatial Understanding, Grouping, Analogy, Ranking Test, Problems based on Figures.

Section – 2 : Introduction to Computers, Parts of Computer, Uses of Computer, Keys and Keyboard, Computer Mouse, Starting and Shutting down the Computer, Introduction to MS-Paint, Latest Developments in the field of IT.

Section – 3 : Higher Order Thinking Questions - Syllabus as per Section – 2.

SECTION 01 LOGICAL REASONING

1. Riya has three keys as shown below. Which is the longest key?



- A. Key 1
- B. Key 2
- C. Key 3
- D. All are same



2. Ankur has a can of paint like the one shown in the picture. What is the shape of the top of the can of paint?



- A.
- B.
- C.
- D.

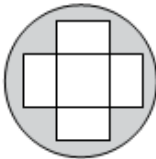
3. Which of the following is the odd one out?

- A.
- B.
- C.
- D.

4. Meeku has 2  notes and 1  note. Which of the following things can he buy?



5. Which of the following shapes cannot be found in the given figure?



- A. Circle
B. Triangle
C. Square
D. Rectangle

SECTION 02 COMPUTER AND INFORMATION TECHNOLOGY

6. Monitor of computer can _____.
- A. Stich cloth
B. Type text
C. Display movies
D. cook food
7. I have many keys on me with different functions. What I am?
- A. Mouse
B. CPU
C. Keyboard
D. Ups

D. Keyboard

15. Which one of the following is the CPU?



A.



B.



C.



D.

16. Which key is used to go to next line?



A.



B.



C.



D.

17. How many buttons does a standard mouse has?

A. Two

B. Four

C. Six

D. Five

18. Identify this device



A. Desktop

B. Laptop

C. CPU

D. PDA

19. Which of the following is used to paint a picture in a computer?

- A. MS- Word
- B. Note pad
- C. Calculator
- D. MS-Paint







20. Button lies at _____ of desktop.

- A. Right
- B. Left
- C. Middle
- D. None of these

21. Which part of computer allows you to type information into the computer?

- A. 
- B. 
- C. 
- D. 

22. Which of the following tools in MS-Paint is used to draw a free hand drawing in the drawing area?

- A. 
- B. 
- C. 
- D. 

23. The CPU is like which part of human body?

- A. Hair
- B. Nerves
- C. Brain
- D. Legs

24. Select the correct one.



D. All are correct

25. Which of the following is zoom in MS-Paint?



26. Which of the following is used to play computer games?

- A. Joystick
- B. Printer
- C. Scanner
- D. Speakers

27. Identify the storage device.



28. MS- Paint can be close by clicking on _____ button.



29. The mouse which has a rubber or a metal ball under its belly is _____

- A. Mechanical Mouse
- B. 3D Mouse
- C. Optical Mouse
- D. Tactile Mouse

30. A computer needs _____ to operate.

- A. Air and Water
- B. Electricity
- C. Energy
- D. Food

SECTION 03 ACHIVER'S SECTION

31. Which of the following type of brushes is used to draw the given image in MS-Paint of Windows7?



C.

D.

32. _____ is the 2D jumping game released by Gameloft.



- A. Ninja UP
- B. Ninja
- C. Ninja Jump
- D. Jumping Ninja

33. Which of the following is the CORRECT output, if you perform the given operations on the word MONDAY (where 'I' denotes the cursor)

1. Press 

2. Press 

3. Press 

- A. MONDAY
- B. MONY
- C. MONDY
- D. MONDY

34. Identify this device.



- A. Printer
- B. Floppy Disk
- C. Laptop
- D. None of these

35. Match the terms given in Column-I with their corresponding descriptions in Column-II.

Column-I

Column-II

- | | |
|-------------|-----------------------------|
| (a) Arrow | (i) Vertical blinking line |
| (b) Desktop | (ii) Small graphical images |
| (c) Icons | (iii) Pointer symbol |
| (d) Cursor | (iv) First screen |

- A. (a) - (i), (b) - (ii), (c) - (iii), (d) - (iv)
- B. (a) - (iv), (b) - (iii), (c) - (ii), (d) - (i)
- C. (a) - (iii), (b) - (iv), (c) - (ii), (d) - (i)
- D. (a) - (iii), (b) - (i), (c) - (iv), (d) - (ii)